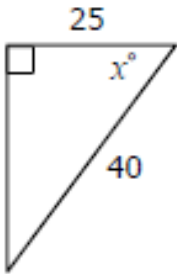
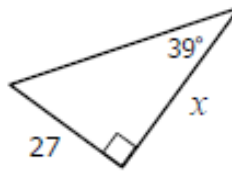


Directions: Solve for x . Round to the nearest tenth.

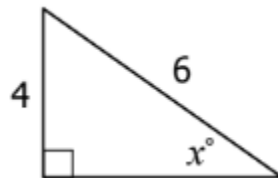
1.



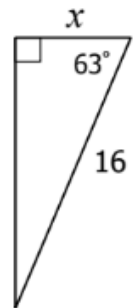
2.



3.



4.



5. Max built a skateboarding ramp that is 16 inches high. The angle formed by the ramp and the ground is 21° . What is the length of the ramp? **(DRAW A DIAGRAM)**

6. A fireman leaned a 36 foot ladder against a building. If he placed the ladder 7 feet from the base of the building, what angle is formed between the ladder and the ground? **(DRAW A DIAGRAM)**

