

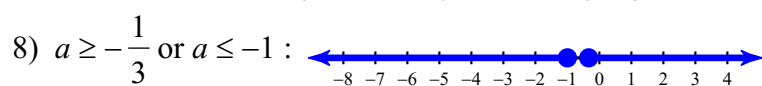
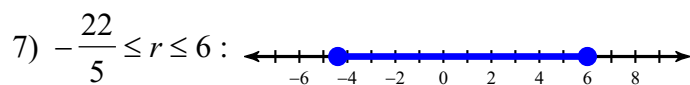
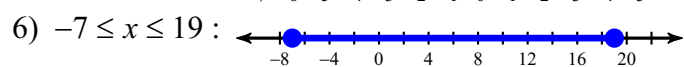
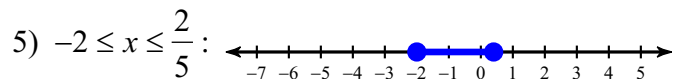
# Answers to Assignment (ID: 1)

1)  $\left\{\frac{6}{5}, -2\right\}$

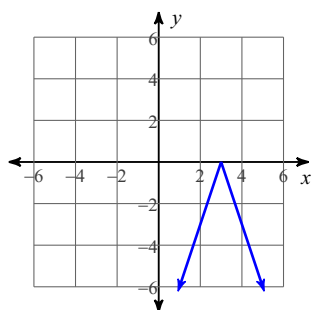
2)  $\left\{-\frac{17}{3}, -1\right\}$

3)  $\{-5, 7\}$

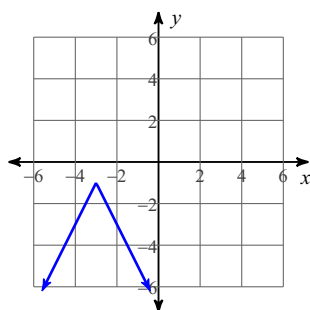
4)  $\{2, 0\}$



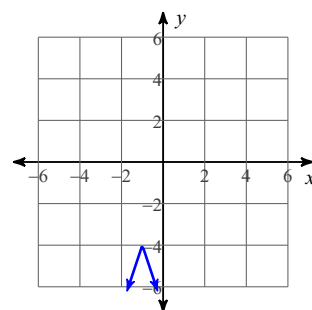
9)



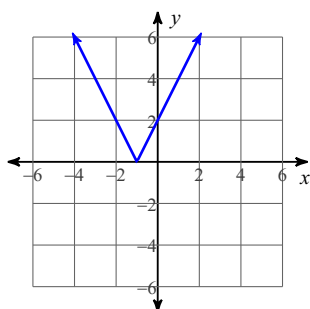
10)



11)



12)



13)  $(3, 5, -1)$

14)  $(3, 1, 3)$

15)  $(-2, 5, 5)$

16)  $(-1, 5, 0)$